

# WELLAND GOULDSMITH SCHOOL

Class III

Fun With Numbers

Time: 30 minutes

I. Make 3 digit numbers and fill in the blanks:

Digits	Greatest Number	Smallest Number
4,9,5	<input type="text"/>	<input type="text"/>
3,0,6	<input type="text"/>	<input type="text"/>
6,9,1	<input type="text"/>	<input type="text"/>
5,8,3	<input type="text"/>	<input type="text"/>

II. Circle the multiplication sentence that describe the group of objects:

a) Hint...



$5 \times 4 =$

$5 \times 2 =$



$3 \times 2 =$

$4 \times 2 =$

How many cherries are there ?  $5 \times 2 = 10$

b)



$6 \times 3 =$

$2 \times 4 =$



$8 \times 2 =$

$8 \times 8 =$

How many octopus legs are there ? \_\_\_\_\_

c)



$9 \times 3 =$

$6 \times 3 =$



$3 \times 9 =$

$3 \times 3 =$



How many puppies are there ? \_\_\_\_\_

d)



$6 \times 5 =$

$3 \times 5 =$



$4 \times 5 =$

$5 \times 5 =$

How many roses are there? \_\_\_\_\_


III. Write in words:

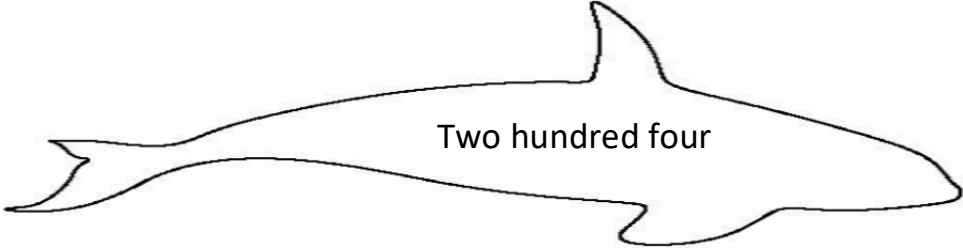
a) 945 --> \_\_\_\_\_


b) 530 --> \_\_\_\_\_

c) 705 --> \_\_\_\_\_


IV. Colour the whales and write the number in figures:

a)  Three hundred sixty two

b)  Two hundred four

c)  Nine hundred twenty

d)



Eight hundred seventy seven